





Combien d'animaux y a-t-il ?

1.  

$$(\text{?}) + (\text{?}) = \boxed{\text{?}}$$

2.  

$$(\text{?}) + (\text{?}) = \boxed{\text{?}}$$

3.  

$$(\text{?}) + (\text{?}) = \boxed{\text{?}}$$

Solution:
 1. 3 + 3 = 6
 2. 6 + 2 = 8
 3. 2 + 5 = 7